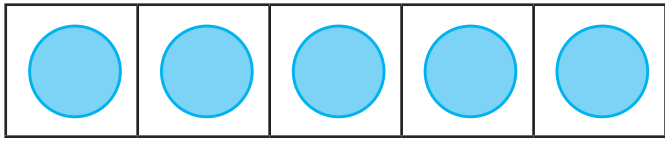
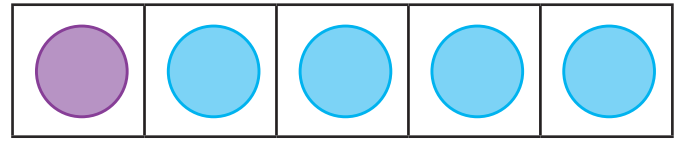


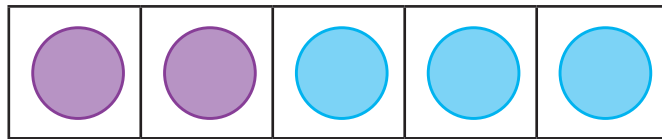
Number Bonds of 5 Five-Frames



$$\square + 5 = 5$$



$$1 + \square = 5$$




$$\square + \square = 5$$


- What do you notice?
- Can you see a pattern?
- Can you complete the five-frames by following the pattern?



$$\square + \square = \square$$



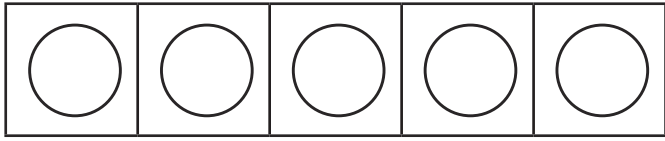
$$\square + \square = \square$$



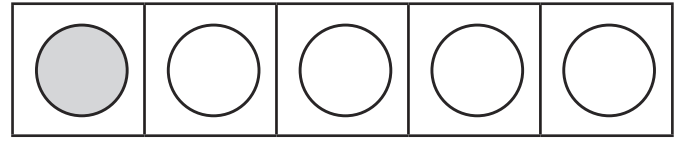
$$\square + \square = \square$$

Number Bonds of 5 Five-Frames

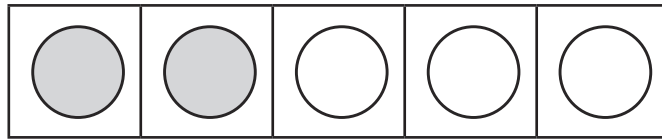
Answers



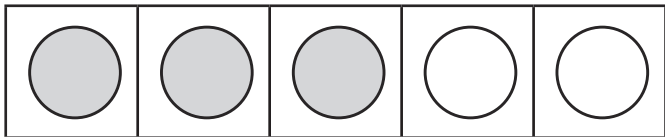
$$\boxed{0} + \boxed{5} = \boxed{5}$$



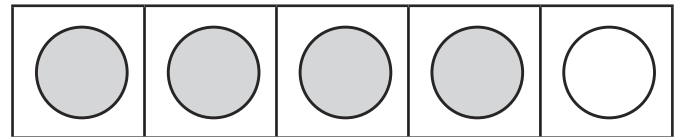
$$\boxed{1} + \boxed{4} = \boxed{5}$$



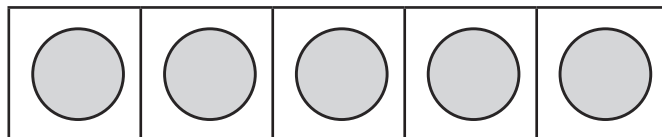
$$\boxed{2} + \boxed{3} = \boxed{5}$$



$$\boxed{3} + \boxed{2} = \boxed{5}$$



$$\boxed{4} + \boxed{1} = \boxed{5}$$



$$\boxed{5} + \boxed{0} = \boxed{5}$$