

Name \_\_\_\_\_

Date \_\_\_\_\_



# TELLING THE TIME - QUARTER TO SHEET 1

Write the correct time underneath each clock. The first one has been done for you.

|                 |                 |                 |
|-----------------|-----------------|-----------------|
|                 |                 |                 |
| Quarter to 4    | Quarter to ____ | Quarter to ____ |
|                 |                 |                 |
| Quarter to ____ | Quarter to ____ | Quarter to ____ |
|                 |                 |                 |
| Quarter to ____ | Quarter to ____ | Quarter to ____ |

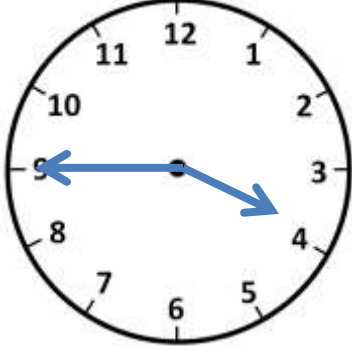
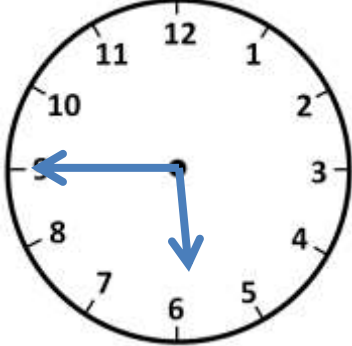
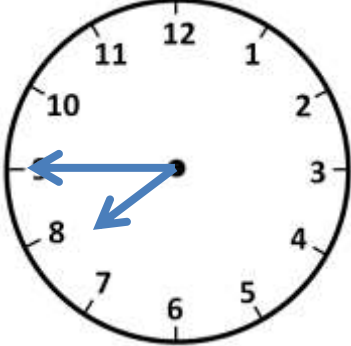
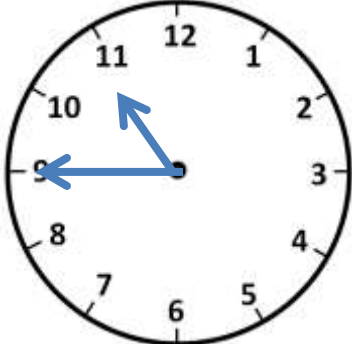

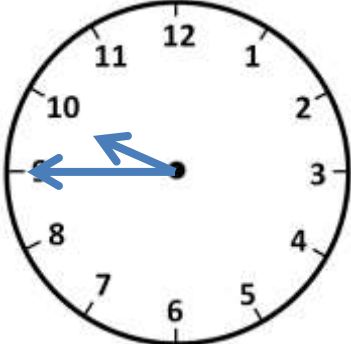
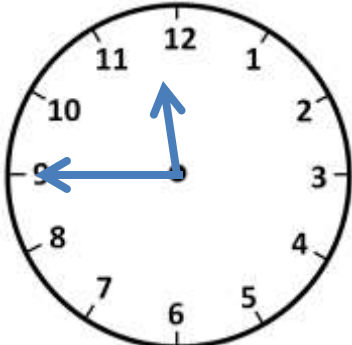
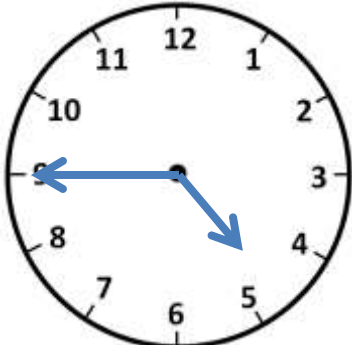
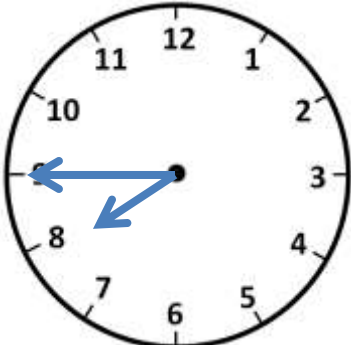


Name

Date



# TELLING THE TIME - QUARTER TO SHEET 1 ANSWERS

|   |   |   |
|---|---|---|
|    |    |    |
| Quarter to <u>4</u>   | Quarter to <u>6</u>   | Quarter to <u>8</u>   |
|   |   |   |
| Quarter to <u>11</u>  | Quarter to <u>2</u>   | Quarter to <u>10</u>  |
|  |  |  |
| Quarter to <u>12</u>  | Quarter to <u>5</u>   | Quarter to <u>8</u>   |



Free Math Sheets, Math Games and Math Help

MATH-SALAMANDERS.COM