

Name

Date




TELLING THE TIME - QUARTER PAST SHEET 3

For each time, you need to write the digital time, or draw the hands in the correct place. The first one is done for you.

11:15		
	4:15	7:15
1:15		12:15



Free Math Sheets, Math Games and Math Help

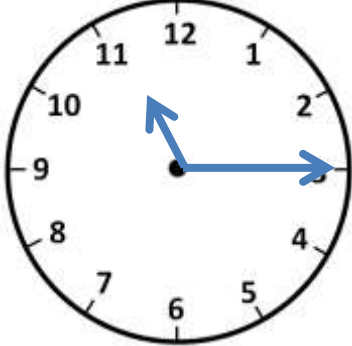
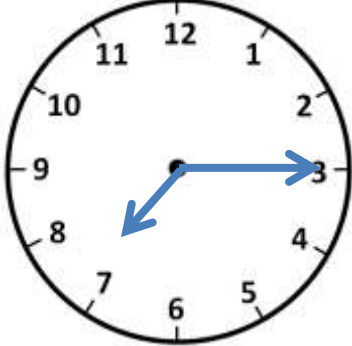
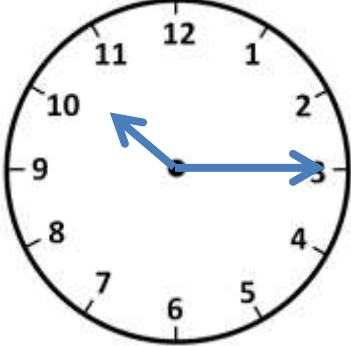
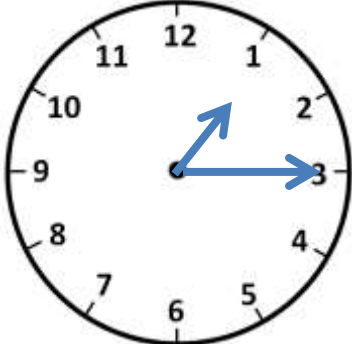
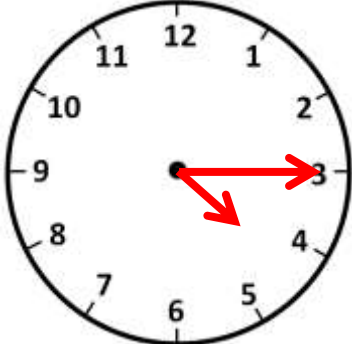
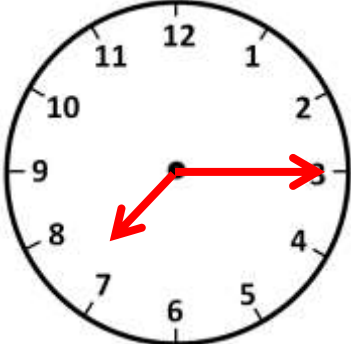
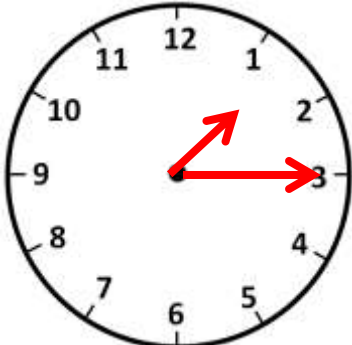
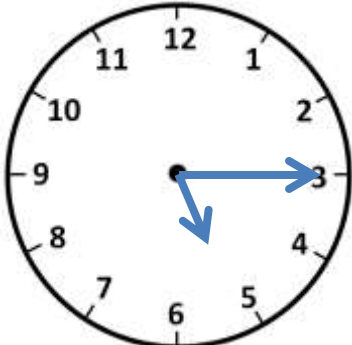
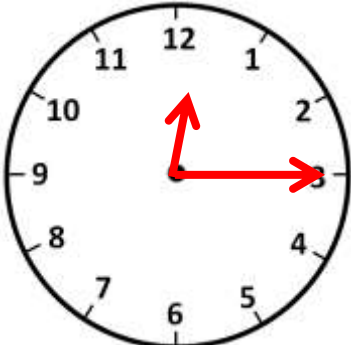
MATH-SALAMANDERS.COM


Name

Date



TELLING THE TIME - QUARTER PAST SHEET 3 ANSWERS

		
11:15	<u>7:15</u>	<u>10:15</u>
		
<u>1:15</u>	4:15	7:15
		
1:15	<u>5:15</u>	12:15



Free Math Sheets, Math Games and Math Help

MATH-SALAMANDERS.COM